



Date.1.10.2020

Writing numbers in words. (पुढील संख्या अक्षरात लिहा)

| | | | | | |
|----|-------------|--------|----|-------|-------|
| 11 | Ten and one | eleven | 16 | _____ | _____ |
| 12 | Ten and two | _____ | 17 | _____ | _____ |
| 13 | _____ | _____ | 18 | _____ | _____ |
| 14 | _____ | _____ | 19 | _____ | _____ |
| 15 | _____ | _____ | 20 | ---- | वीस |

Writing numbers in words. (पुढील संख्या अक्षरात लिहा)

| | | | | | |
|----|----------------|------------|----|-------|--------|
| 21 | Twenty and one | twenty one | 26 | ----- | ----- |
| 22 | Twenty and two | ----- | 27 | ----- | ----- |
| 23 | ----- | ----- | 28 | ----- | ----- |
| 24 | ----- | ----- | 29 | ----- | ----- |
| 25 | ----- | ----- | 30 | ---- | Thirty |
| 31 | Thirty and one | thirty one | 36 | ----- | ----- |
| 32 | Thirty and two | ----- | 37 | ----- | ----- |
| 33 | ----- | ----- | 38 | ----- | ----- |
| 34 | ----- | ----- | 39 | ----- | ----- |
| 35 | ----- | ----- | 40 | ---- | Forty |

Writing numbers in words. (पुढील संख्या अक्षरात लिहा)

| | | | | | |
|----|---------------|-----------|----|-------|-------|
| 41 | Forty and one | forty one | 46 | ----- | ----- |
| 42 | Forty and two | ----- | 47 | ----- | ----- |
| 43 | ----- | ----- | 48 | ----- | ----- |
| 44 | ----- | ----- | 49 | ----- | ----- |
| 45 | ----- | ----- | 50 | ---- | Fifty |

Writing numbers in words. (पुढील संख्या अक्षरात लिहा)

| | | | | | |
|----|---------------|-----------|----|-------|---------|
| 51 | Fifty and one | fifty one | 56 | ----- | ----- |
| 52 | ----- | ----- | 57 | ----- | ----- |
| 53 | ----- | ----- | 58 | ----- | ----- |
| 54 | ----- | ----- | 59 | ----- | ----- |
| 55 | ----- | ----- | 60 | ---- | Sixty |
| 61 | Sixty and one | sixty one | 66 | ----- | ----- |
| 62 | Sixty and two | ----- | 67 | ----- | ----- |
| 63 | ----- | ----- | 68 | ----- | ----- |
| 64 | ----- | ----- | 69 | ----- | ----- |
| 65 | ----- | ----- | 70 | ---- | Seventy |

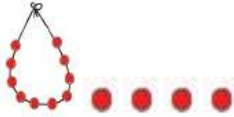






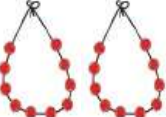
Writing numbers in words. (पुढील संख्या अक्षरात लिहा)

| | | | | | |
|----|-----------------|-------------|----|-------|--------|
| 71 | Seventy and one | seventy one | 76 | ----- | ----- |
| 72 | Seventy and two | ----- | 77 | ----- | ----- |
| 73 | ----- | ----- | 78 | ----- | ----- |
| 74 | ----- | ----- | 79 | ----- | ----- |
| 75 | ----- | ----- | 80 | ---- | eighty |

Writing numbers in words. (पुढील संख्या अक्षरात लिहा)

| | | | | | |
|----|----------------|------------|-----|-------|---------|
| 81 | Eighty and one | eighty one | 86 | ----- | ----- |
| 82 | Eighty and two | ----- | 87 | ----- | ----- |
| 83 | ----- | ----- | 88 | ----- | ----- |
| 84 | ----- | ----- | 89 | ----- | ----- |
| 85 | ----- | ----- | 90 | ----- | ninety |
| 91 | Ninety and one | ninety one | 96 | ----- | ----- |
| 92 | Ninety and two | ----- | 97 | ----- | ----- |
| 93 | ----- | ----- | 98 | ----- | ----- |
| 94 | ----- | ----- | 99 | ----- | ----- |
| 95 | ----- | ----- | 100 | ----- | Hundred |

Count and write. (मोजा व लिहा)

| | | | |
|---|----|--|--|
|  | 14 |  | |
|  | |  | |
|  | |  | |
|  | |  | |

Date.10.10.2020

Write the place value of each underlined digit.(अधोरेखित अंकाची स्थानिक किंमत लिही.)

| | |
|--------------------|--|
| $16 =$ | |
| $\underline{4}2 =$ | |
| $\underline{5}3 =$ | |
| $8\underline{0} =$ | |
| $\underline{9}1 =$ | |

| | |
|--------------------|--|
| $9\underline{0} =$ | |
| $8\underline{8} =$ | |
| $7\underline{2} =$ | |
| $\underline{6}9 =$ | |
| $5\underline{5} =$ | |

Date.12.10.2020


Add. (बेरीज करा)

| | |
|-----------|--|
| $2 + 3 =$ | |
| $2 + 5 =$ | |
| $4 + 3 =$ | |
| $5 + 4 =$ | |
| $1 + 3 =$ | |
| $4 + 4 =$ | |
| $3 + 6 =$ | |
| $5 + 2 =$ | |
| $2 + 3 =$ | |
| $1 + 4 =$ | |

| | |
|-----------|--|
| $4 + 2 =$ | |
| $5 + 1 =$ | |
| $2 + 9 =$ | |
| $7 + 1 =$ | |
| $1 + 6 =$ | |
| $5 + 3 =$ | |
| $3 + 3 =$ | |
| $7 + 2 =$ | |
| $6 + 1 =$ | |
| $6 + 2 =$ | |

Date.13.10.2020

Write the numbers 51 to 100 on the given scale. (दिलेल्या मोजपट्टीवर 51 ते 100 संख्या लिहा)



Date.14.10.2020

Add up using the scales given above. (वर दिलेल्या मोजपट्टीचा वापर करून बेरीज करा.)

| | |
|------------|--|
| $52 + 8 =$ | |
| $63 + 9 =$ | |
| $75 + 1 =$ | |
| $88 + 5 =$ | |
| $90 + 4 =$ | |
| $58 + 8 =$ | |
| $82 + 9 =$ | |
| $80 + 5 =$ | |

| | |
|------------|--|
| $89 + 5 =$ | |
| $79 + 5 =$ | |
| $69 + 5 =$ | |
| $59 + 5 =$ | |
| $49 + 1 =$ | |
| $50 + 5 =$ | |
| $93 + 5 =$ | |
| $64 + 5 =$ | |

Add. (बेरीज करा)

| Tens | Unit |
|------|------|
| 3 | 5 |
| + | |
| 2 | 3 |
| | |

| Tens | Unit |
|------|------|
| 2 | 4 |
| + | |
| 2 | 2 |
| | |

| Tens | Unit |
|------|------|
| 3 | 7 |
| + | |
| 3 | 3 |
| | |

| Tens | Unit |
|------|------|
| 5 | 5 |
| + | |
| 2 | 1 |
| | |

| Tens | Unit |
|------|------|
| 1 | 5 |
| + | |
| 2 | 2 |
| | |

| Tens | Unit |
|------|------|
| 2 | 7 |
| + | |
| 4 | 3 |
| | |

| Tens | Unit |
|------|------|
| 5 | 5 |
| + | |
| 4 | 3 |
| | |

| Tens | Unit |
|------|------|
| 1 | 3 |
| + | |
| 6 | 3 |
| | |

| Tens | Unit |
|------|------|
| 1 | 2 |
| + | |
| 2 | 3 |
| | |

| Tens | Unit |
|------|------|
| 1 | 5 |
| + | |
| 1 | 2 |
| | |

| Tens | Unit |
|------|------|
| 2 | 3 |
| + | |
| 3 | 3 |
| | |

| Tens | Unit |
|------|------|
| 2 | 5 |
| + | |
| 2 | 1 |
| | |

| Tens | Unit |
|------|------|
| 3 | 1 |
| + | |
| 3 | 2 |
| | |

| Tens | Unit |
|------|------|
| 2 | 1 |
| + | |
| 2 | 3 |
| | |

| Tens | Unit |
|------|------|
| 5 | 0 |
| + | |
| 4 | 0 |
| | |

| Tens | Unit |
|------|------|
| 0 | 3 |
| + | |
| 1 | 0 |
| | |

Dada had 15 rupees. His aunt gave him 20 more. How many rupees does he have now ?

| Tens | Unit |
|------|------|
| + | |
| | |

There were 24 books in a cupboard and 12 more were placed in it. How many books are there in the cupboard now ?

| Tens | Unit |
|------|------|
| + | |
| | |

There were 18 boxes in the house, mother bought 11 more boxes from the market. How many boxes are there altogether in the house now ?

| Tens | Unit |
|------|------|
| + | |
| | |

Sajid has 24 eggs and Shabana has 32. How many eggs in all do they have ?

| Tens | Unit |
|------|------|
| + | |
| | |

| Tens | Unit |
|------|------|
| 5 | 1 |
| + | |
| 3 | 6 |
| | |

| Tens | Unit |
|------|------|
| 9 | 1 |
| + | |
| 0 | 3 |
| | |

| Tens | Unit |
|------|------|
| 3 | 0 |
| + | |
| 4 | 0 |
| | |

| Tens | Unit |
|------|------|
| 0 | 2 |
| + | |
| 1 | 0 |
| | |

Subtract (वजाबाकी करा)

| | | | |
|---------|--|---------|--|
| 5 - 2 = | | 7 - 2 = | |
| 7 - 5 = | | 3 - 2 = | |
| 9 - 4 = | | 5 - 5 = | |
| 5 - 1 = | | 9 - 7 = | |
| 4 - 4 = | | 3 - 2 = | |
| 2 - 1 = | | 8 - 2 = | |
| 7 - 3 = | | 4 - 2 = | |
| 8 - 5 = | | 3 - 1 = | |

Subtract (वजाबाकी करा)

| | | | |
|---------|--|---------|--|
| 5 - 2 = | | 7 - 2 = | |
| 7 - 5 = | | 3 - 2 = | |
| 9 - 4 = | | 5 - 5 = | |
| 5 - 1 = | | 9 - 7 = | |
| 4 - 4 = | | 3 - 2 = | |
| 2 - 1 = | | 8 - 2 = | |
| 7 - 3 = | | 4 - 2 = | |
| 8 - 5 = | | 3 - 1 = | |

Subtract (वजाबाकी करा)

| | | | |
|----------|--|----------|--|
| 15 - 2 = | | 17 - 2 = | |
| 37 - 5 = | | 13 - 2 = | |
| 19 - 4 = | | 25 - 5 = | |
| 25 - 1 = | | 59 - 2 = | |
| 35 - 4 = | | 18 - 5 = | |
| 2 - 0 = | | 8 - 0 = | |
| 7 - 0 = | | 4 - 0 = | |
| 8 - 8 = | | 3 - 3 = | |

Solve. (सोडवा)

$$2 + \boxed{} = 5 \text{ म्हणून } \boxed{} - 3 = 2 \text{ आणि } 5 - 2 = \boxed{}$$

$$1 + \boxed{} = 6 \text{ म्हणून } \boxed{} - 5 = 1 \text{ आणि } 6 - 1 = \boxed{}$$

$$4 + \boxed{} = 5 \text{ म्हणून } \boxed{} - 4 = 1 \text{ आणि } 5 - 1 = \boxed{}$$

$$7 + \boxed{} = 9 \text{ म्हणून } \boxed{} - 7 = 2 \text{ आणि } 9 - 2 = \boxed{}$$